



Minusaufgaben

im Zahlenraum
bis 20



$$11 - 8 = \underline{\quad}$$

$$15 - 6 = \underline{\quad}$$



$$16 - 8 = \underline{\quad}$$

$$11 - 6 = \underline{\quad}$$





$$19 - 10 = \underline{\quad}$$

$$14 - 1 = \underline{\quad}$$

$$13 - 1 = \underline{\quad}$$

$$15 - 15 = \underline{\quad}$$

$$14 - 12 = \underline{\quad}$$



$$17 - \underline{\quad} = 2$$

$$14 - \underline{\quad} = 3$$

$$11 - \underline{\quad} = 9$$

$$15 - \underline{\quad} = 7$$

$$18 - \underline{\quad} = 4$$


$$\underline{\quad} - 1 = 11$$

$$\underline{\quad} - 0 = 14$$

$$\underline{\quad} - 3 = 7$$

$$\underline{\quad} - 8 = 5$$

$$\underline{\quad} - 10 = 0$$



$$20 - 14 = \underline{\quad}$$

$$19 - \underline{\quad} = 6$$


$$11 - \underline{\quad} = 5$$

$$\underline{\quad} - 8 = 9$$

$$14 - 0 = \underline{\quad}$$


Minusaufgaben

im Zahlenraum
bis 20



$$11 - 8 = \underline{3}$$

$$15 - 6 = \underline{9}$$



$$16 - 8 = \underline{8}$$

$$11 - 6 = \underline{5}$$





$$19 - 10 = \underline{9}$$

$$14 - 1 = \underline{13}$$

$$13 - 1 = \underline{12}$$

$$15 - 15 = \underline{0}$$

$$14 - 12 = \underline{2}$$



$$17 - \underline{15} = 2$$

$$14 - \underline{11} = 3$$

$$11 - \underline{2} = 9$$

$$15 - \underline{8} = 7$$

$$18 - \underline{14} = 4$$



$$\underline{12} - 1 = 11$$

$$\underline{14} - 0 = 14$$

$$\underline{10} - 3 = 7$$

$$\underline{13} - 8 = 5$$

$$\underline{10} - 10 = 0$$



$$20 - 14 = \underline{6}$$

$$19 - \underline{13} = 6$$

$$11 - \underline{6} = 5$$

$$\underline{17} - 8 = 9$$

$$14 - 0 = \underline{14}$$