



Minusaufgaben

im Zahlenraum
bis 10



$$8 - 3 = \underline{\quad}$$



$$9 - 2 = \underline{\quad}$$

$$6 - 3 = \underline{\quad}$$

$$10 - 1 = \underline{\quad}$$





$9 - 2 = \underline{\quad}$

$7 - 7 = \underline{\quad}$

$6 - 1 = \underline{\quad}$

$9 - 4 = \underline{\quad}$

$7 - 4 = \underline{\quad}$



$9 - \underline{\quad} = 0$

$10 - \underline{\quad} = 9$

$5 - \underline{\quad} = 3$

$9 - \underline{\quad} = 2$

$10 - \underline{\quad} = 2$



$$6 - \underline{\quad} = 5$$

$$6 - \underline{\quad} = 6$$

$$9 - \underline{\quad} = 3$$

$$8 - \underline{\quad} = 4$$

$$10 - \underline{\quad} = 2$$



$$\underline{\quad} - 9 = 0$$

$$\underline{\quad} - 4 = 3$$


$$8 - 3 = \underline{\quad}$$

$$8 - \underline{\quad} = 1$$


$$7 - \underline{\quad} = 7$$

Minusaufgaben

im Zahlenraum
bis 10



$$8 - 3 = \underline{5}$$



$$9 - 2 = \underline{7}$$

$$6 - 3 = \underline{3}$$

$$10 - 1 = \underline{9}$$




$$9 - 2 = \underline{7}$$

$$7 - 7 = \underline{0}$$

$$6 - 1 = \underline{5}$$

$$9 - 4 = \underline{5}$$

$$7 - 4 = \underline{3}$$



$$9 - \underline{9} = 0$$

$$10 - \underline{1} = 9$$

$$5 - \underline{2} = 3$$

$$9 - \underline{7} = 2$$

$$10 - \underline{8} = 2$$



$$6 - \underline{1} = 5$$

$$6 - \underline{0} = 6$$

$$9 - \underline{6} = 3$$

$$8 - \underline{4} = 4$$

$$10 - \underline{8} = 2$$



$$\underline{9} - 9 = 0$$

$$\underline{7} - 4 = 3$$

$$8 - 3 = \underline{5}$$

$$8 - \underline{7} = 1$$

$$7 - \underline{0} = 7$$